

KENDRIYA VIDYALAYA NO-5 , KALINGA NAGAR ,BHUBANESWAR
HOMEWORK ASSIGNMENT (AUTUMN BREAK) (SESSION-2022-2023)

CLASS - VI SECTION -A&B

ENGLISH

Question 1. Complete the story.

mountain mouse mountain _____ thing mouse _____ neither
big _____ nor small _____ big size _____ big
advantages stop the clouds _____ across the sky. agreed the
mouse. _____ can't stop making big holes _____
foundation _____ tiny mouse outwitted mightly mountain.

Q2. Write an application/formal letter to the principal asking for arranging a trip.

Q3. Read the Auto biography of Mahatma Gandhi.

केन्द्रीय विद्यालय नं-5 , भुवनेश्वर हिन्दी अवकाश गृहकार्य कक्षा - छठी

1. अपने स्कूल के मुख्याध्यापक को फ़्रीस माफ़ी के लिये प्रार्थना पत्र लिखें ।
2. अनुच्छेद लेखन - क) मीठी वाणी का महत्त्व ख) प्रातः कालीन सैर
3. संज्ञा क्री पररभाषा लिख कर उसके भेद उदाहरण सहित लिखिए ।
4. विशेषण के कितने भेद होते हैं उनके नाम सहित लिखिए ।
5. गुणवाचक विशेषण के पाँच भेद उदाहरणसहित लिखें ।

SUB- MATHEMATICS

General Instruction:

- This question paper contains 18 questions
 - All the questions are compulsory
-

SECTION – A

1. (a) XCVIII is :

- (i) 98
- (ii) 78
- (iii) 108
- (iv) 99

(b) How many million makes one crore:

- (i) 100
- (ii) 10
- (iii) 1
- (iv) 1000

(c) The predecessor of 9999 :

- (i) 1000
- (ii) 1001
- (iii) 9998
- (iv) 10000

(d) Additive identity for whole number is :

- (i) 1
- (ii) -1
- (iii) 2
- (iv) 0

(e) An angle whose measure is greater than that of right angle is :

- (i) Acute angle
- (ii) Obtuse angle
- (iii) Straight angle
- (iv) None

(f) $(-75) + (25)$ is:

- (i) 50
- (ii) 100
- (iii) -50
- (iv) -100

(g) The fraction of shaded portion of fig. given:



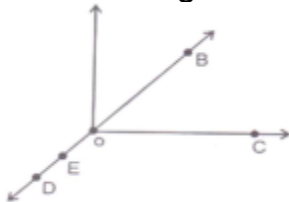
- (i) $\frac{1}{3}$
(ii) $\frac{1}{5}$
(iii) $\frac{1}{6}$
(iv) $\frac{1}{4}$
-

SECTION-B

2. Find product using suitable property 854×102 .
3. Find common factors of 15 and 25.
4. Estimate to nearest hundred ($613+120$)
5. What fraction of a day is 3 hours ?
6. Represent (-5) on number line.
7. Draw one open curve and one closed curve diagram.

SECTION -C

8. Use the figure to name:



- (a) Five points
- (b) A line
- (c) Four rays

9. A machine on an average, manufactures 2,825 screws a day. How many screws did it produce in the month of January?

10. Find the value of $(297 \times 17) + (297 \times 3)$






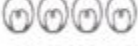

11. Find the LCM of 20, 25 and 30.

12. Use number line and add: $(-5) + 10$.

13. Which is greater $\frac{4}{5}$ or $\frac{5}{6}$.

14. Solve: $1\frac{1}{3} + 3\frac{2}{3}$.

15. The sale of electric bulbs on different day of week is shown below:

Days	No. of electric bulbs	0 – 2 bulbs
Monday		
Tuesday		
Wednesday		
Thursday		
Friday		
Saturday		
Sunday		

Answer the following questions:

(i) How many bulbs were sold on Friday?

(ii) On which day were the maximum number of bulbs sold?

(iii) On which of days same number of bulbs were sold?

SECTION-D

16. Rafiq exercised for $\frac{3}{6}$ of an hour, while Rohit exercised for $\frac{3}{4}$ of an hour. Who exercised for a longer time?

17. Match the following:

Measures of Triangle	Type of Triangle
----------------------	------------------

(i)	3 sides of equal length	(a)	Scalene
(ii)	2 sides of equal length	(b)	Isosceles right angled
(iii)	All sides are different	(c)	Obtuse angled
(iv)	3 acute angles	(d)	Right angled
(v)	1 right angle	(e)	Equilateral
(vi)	1 obtuse angle	(f)	Acute angled
(vii)	1 right angle with two sides of	(g)	Isosceles

18. Determine the greatest 3-digit number exactly divisible by 8, 10, 12.

KENDRIYA VIDYALAYA NO.5, KALINGANAGAR, BHUBANESWAR

HOLIDAY HOME WORK (AUTUMN BREAK, 2022)

CLASS: VI A AND B

SUBJECT: SOCIAL SCIENCE

GEOGRAPHY:

- Q1- How does a planet differ from a star?
 Q2- Why is the earth called a unique planet?
 Q3- What is the true shape of the earth?
 Q4- what are the three heat zones of the earth?
 Q5- Define rotation and revolution?
 Q5- What is a leap year?
 Q6-What is an equinox?
 Q7-What are the three components of a map?
 Q8- How are maps more helpful than a globe?
 Q9- Distinguish between a map and a plan?
 Q10-Why is the earth called a blue planet?
 Q11-Why is the biosphere important for living organisms?

HISTORY:

- Q12- Distinguish between manuscript and inscriptions.
 Q13-Why do people who grow crops have to stay in the same place for a long time?
 Q14-How do archeologists know that cloth was used in the Harappan civilization?
 Q15- In what ways are the books we read today different from the Rig-Veda?

Q16- Why did the rajas of Mahajanapadas build forts?

Q17-What were the main teachings of the Mahavira?

CIVICS:

Q18- Why do you think living in India with its rich heritage of diversity adds to your life?

Q19-Explain the terms stereotype and prejudice.

Q20- What was the suffrage movement?

Q21- What are the various ways in which people participate in the process of government?

Q22- What is the difference between Gram Sabha and a Gram Panchayat?

COMPUTER SCIENCE

Holiday homework

1. How coding is being utilized in everyday life to perform complex tasks in an easy manner
2. What are the real-life applications of coding?
3. What are the common Data Types in programming?
4. Name a data type that can store exponential values?
5. Write the pseudocode to perform an addition operation on two variables in a program?

Sub.. Science Holiday H.W

1. Compare between any two joints.
2. Name any 5 herbs and shrubs.
3. Identify any 5 changes as physical or chemical change.
4. Paste or draw picture of any 1 herbivore ,carnivore and omnivore.
5. Draw a living organism in its habitat.

केन्द्रीय: विद्यालय: क्रमांक: -5 कलिंगनगरम् , भुवनेश्वरम्

शरदावकाशकालीन - संस्कृत -गृहकार्यम् 2022-23

कक्षा - षष्ठी अनुभाग: - अ तथा ब (A &B)

- 1) पठित -पाठानाम् अभ्यास: करणीय: शब्दार्थ -कण्ठस्थीकरणम् च
- 2) पठित -पाठस्थ - श्लोक - कण्ठस्थीकरणम्
- 3) स्वपरिचयलेखनम् - (In one A4 size paper)
 - क) मम नाम -----
 - ख) मम पितु: नाम -----
 - ग) मम मातु: नाम -----
 - घ) मम कक्षा ----- अनुभाग: ----- अनुक्रमांक: -----
 - ङ) मम विद्यालयस्य नाम -----
 - च) मम प्रिय: विषय: -----
 - छ) मम रूचि: -----
 - ज) मम जीवनलक्ष्यम् - (अहं ----- भवितुम् इच्छामि ।)
 - झ) मम शक्ति: - (My strength) -----
 - ञ) मम आदर्श: (प्रेरणास्रोत:) -----
- 4) छात्र -दैनन्दिनी -लेखनम् - - (In one A4 size paper)

क्रमसंख्या	पठित -पाठस्य नाम	पाठात् का शिक्षा लब्धा (क्या सीख मिली)	रोचकतथ्यम् (क्या अच्छा लगा)

- 5) एकम् अनुच्छेदलेखनम् / एकं चित्रवर्णनम् / एकं कथालेखनम् (In one A4 size paper)

धन्यवाद: । शुभा दशहरा । सर्वेषां सर्व शुभमस्तु ।

श्रीमती निरुपमा रथ प्र. स्ना. शि. (संस्कृतम्)

KENDRIYA VIDYALAYA NO.5 , BBSR

ODIA HOLIDAY HOMEWORK

CLASS - 6

1. ବର୍ଣ୍ଣମାଳାରେ ଥିବା ସ୍ଵରବର୍ଣ୍ଣ ଗୁଡ଼ି କ ଲେଖ ।

2. 'ଉ' ମାତ୍ର ଲଗାଇ 10 ଟି ଶବ୍ଦ ଲେଖ ।

3. ଶୂନ୍ୟସ୍ଥାନ ପୂରଣ କର ।

ଅଭି_____ଷ ନୁ_____ନ

ନା_____ସାପ ପୁ_____

ଠ_____ଣୀ ଶୁ ଗା _____

ମଧୁ_____ ଜ_____ଗୁ ହ

ସ _____ ଦାୟ କପୋ _____

4. ଶବ୍ଦକୁ ଠିକ୍ ଭାବରେ ସଜାଡ଼ି ଲେଖ ।

ଶ ଧ ର ଶ

ହା ସ ଇ ଡି

ସ ନ ଶା

ଧ ଶୀ ର

ବ ଦି ସ

5. ହସ୍ତାକ୍ଷର ଲେଖ । (3 Pages)